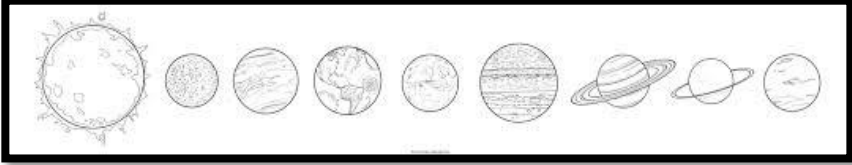



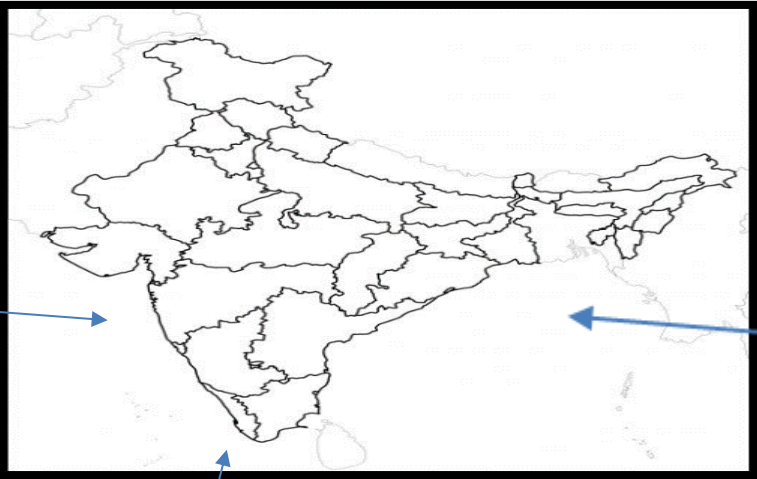


<b>BCM SCHOOL</b> <b>Basant Avenue, Dugri Road, Ludhiana</b> <b>Class - II</b> <b>EVS ASSIGNMENT</b> <b>ANSWER KEY</b> <b>CH-15 Air, Water and Weather, CH-16 Directions and Time,</b> <b>CH-17 The Earth and the sky +Map</b>		
I	Tick (✓) The correct answer:	
1	We use umbrella usually in _____ season. Windy          Spring          Rainy ✓	
2	_____ is the closest planet to the sun. Saturn          Mercury ✓          Mars	
II	Circle the odd one out and give reason.	
1 R-	Typhoid    Asthma    Cholera    Jaundice It is not caused by dirty water.	
2 R-	Summer    Autumn    Cloudy    Rainy It is not a season.	
III	Name the following.	
1	Full Moon	Purnima
2	Direction opposite to South	North
IV	Give two examples of each.	
1	Types of weather :	Sunny    Cloudy
2	Diseases caused by polluted air:	Ashtma    Tuberculosis
V	Answer the following questions.	
Q1	Name any two things in which air can be filled. Tyre          Balloon	
Q2	Who landed on the moon first? When? Neil Armstrong on 20 <sup>th</sup> July 1969	
VI	Define	
1	Continents- Large masses of land on Earth.	
2	Valley - Places between two mountains.	
VII	Match the followings	
1	Huge ball of Fire	Amavasya 2
2	New Moon	365 days 4
3	Dry sandy land.	Sun 1
4	One Year	Desert 3

VIII	Case study	
	<p>Read the lines and answer the following Questions.  Earth is our home planet, the only one in our solar system where we can live.</p> 	
1	<p>How many planets in our solar system. Write their names.  <b>8 Planets in our solar system. Mars, Jupiter, Mars, Earth, Venus, Saturn, Uranus</b></p>	
2	<p>Riddles- I am the tip of the mountain. <b>Peak</b></p>	
3	<p>Which type of landform Punjab has ? <b>Plains</b></p>	
4	<p>Is Manali hilly/ plain area ? <b>Hilly</b></p>	
5	<p>Identify Picture</p>  <p><b>Crescent moon</b></p>	
	<p>Draw and label</p> <p>Main source of Water  Mountain </p>	
X	<p>Locate Water bodies around India.</p>  <p><b>Arabian sea</b> <b>Indian Ocean</b> <b>Bay of Bengal</b></p> <p><b>March Exam Syllabus -CH-15 Air, Water and Weather,CH-16 Directions and Time, CH-17 The Earth and the sky +Map</b></p>	