

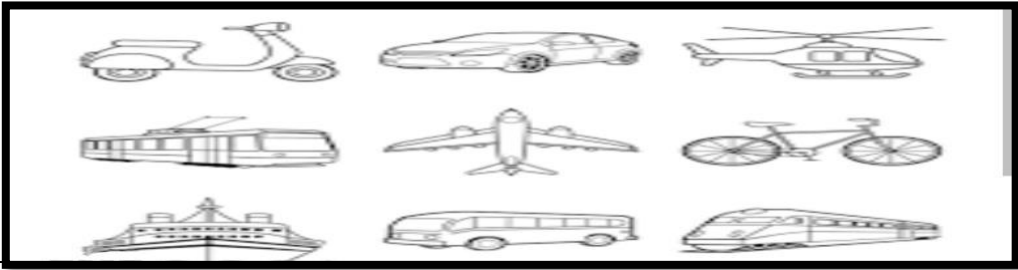


BCM SCHOOL
Basant Avenue, Dugri Road, Ludhiana
EVS REVISION ASSIGNMENT
Class – III

	BCM SCHOOL Basant Avenue, Dugri Road, Ludhiana EVS REVISION ASSIGNMENT Class – III	
A	Tick the correct option.	
1.	Mercury is the nearest planet to the sun but the hottest planet is -	
	a) Jupiter <input type="checkbox"/> b) Pluto. <input type="checkbox"/> c) Venus <input type="checkbox"/>	
2.	We cannot live on any other planet as they don't have -	
	a) Water <input type="checkbox"/> b) Air <input type="checkbox"/> c) Both of these <input type="checkbox"/>	
3.	Animal that carry loads in the forest is	
	a) Rabbit. <input type="checkbox"/> b) Elephant <input type="checkbox"/> c) Bull. <input type="checkbox"/>	
4.	E mail can be sent by -	
	a) Computer <input type="checkbox"/> b) Letters <input type="checkbox"/> c) Television <input type="checkbox"/>	
5.	Non communicable disease is-	
	a) Measles <input type="checkbox"/> b) Typhoid <input type="checkbox"/> c) Chicken pox <input type="checkbox"/>	
B.	Give one word answer.	
1.	Sixth planet of our solar system. _____	
2.	It is usually used in desert to carry loads . _____	
3.	A cart without wheels pulled by dogs on snow . _____	
4.	A vehicle that carries mails . _____	
5.	A place where we can catch the train . _____	
6.	A vehicle with three wheels pulled by humans. _____	
7.	Coldest planet . _____	
8.	Less than half lit moon. _____	
C.	Rectify the underlined word in the following sentences.	
1.	<u>Star</u> does not have its own heat and light.	
2.	Blind people use <u>sign</u> language to communicate.	
3.	Bullock cart is pulled by <u>humans</u>.	
4.	<u>Mercury</u> is the biggest planet .	
5.	Mars is called a <u>Blue</u> Planet.	
6.	Engine of a <u>bicycle</u> needs fuel to run .	

D.	Fill the missing letters using hints.		
1.	Flies aeroplane . P _ _ _ O _ _		
2.	More than half lit moon. C _ _ E _ _ _ E N _ _		
3.	Local train in Delhi. M _ _ _ _ O		
4.	It corrupts computer. V _ _ _ U _ _		
E.	Circle the odd one and give reason.		
1.	Ship. Train. Scooter. Car		
2.	Radio. Television. Pigeon Magazine		
3.	Sun. Star. Planet. Mountain		
F.	Identify the pictures		
	Picture.	Name	Type of transport
1.		_____.	_____.
2.		_____.	_____.
G.	Define the following.		
1.	Transportation		
2.	Revolution		
3.	Map		
H.	CASE STUDY		
			
1.	Why do we need means of transport?		
2.	Which is the fastest means of transport ?		
3.	Pick out the names of any three means of land transport ?		

I.	Write full forms of the following.	
1.	SMS	
2.	OTP	
3	GPS	
J.	Draw, colour and name the following.	
1.	It is the natural satellite of the earth .	
2.	Means of transport that moves underwater.	
K.	Locate six neighbouring countries of India on the map of India.	