



1) MCQ (Tick the correct answer)

1. The length of a door is _____ than 1 metre.

- a) less b) more c) equal

2. Kilogram and gram are two standard units of _____

- a) length b) weight c) capacity

3. The length of the straw is measured in _____

- a) metre b) centimetre c) gram

4. Which of the following is the symbol used for the Indian currency?

- a) ₹ b) Rs c) \$

2) Find the difference

$426 - 307$

3) Fill in the blanks using multiplication tables

a) $5 \times 9 =$ _____ b) $9 \times 10 =$ _____

c) $7 \times 4 =$ _____ d) $3 \times 8 =$ _____

4) Multiply

324×2

5) Akshay has ₹ 80 in his piggy bank . He used ₹34 . How many rupees are left in his piggy bank ?

6) Which standard unit would you use to measure the following

- a) Length of a door
b) Quantity of water in a water tank
c) Weight of a school bag

7) Sonu reads 5 books in one day. How many books he will read in 40 days ?

8) Fill the missing numbers

a) 420 , 430 , 440 _____ , _____

b) 200, 250, 300, _____ , _____

9) Look at the pictures and Fill in the blanks




Plate A.



Plate B.




Plate C

1. What is the capacity of Plate A?


2. What is the capacity of Plate B?

3. What is the capacity of Plate C?

4. _____ plate contains more ladoos than plate C .

5. _____ plate contains least ladoos.

10) Case Study



The price list of various toys is shown in the above given picture. Read it carefully and answer the questions:

Q1. Which toy costs the most?

Q2. Which toy costs the least?

Q3. How much will the car and helicopter cost together?